



## Identifying fractions - using blocks

---

### Grade 3 Fractions Worksheet

Color the fraction.

1.  $\frac{1}{3} =$  


2.  $\frac{1}{2} =$  


3.  $\frac{2}{6} =$  

4.  $\frac{4}{10} =$  


5.  $\frac{2}{5} =$  


6.  $\frac{6}{8} =$  

7.  $\frac{1}{5} =$  


8.  $\frac{3}{6} =$  

9.  $\frac{6}{10} =$  


10.  $\frac{2}{3} =$  


11.  $\frac{2}{4} =$  


12.  $\frac{1}{8} =$  

13.  $\frac{4}{6} =$  

14.  $\frac{2}{10} =$  


15.  $\frac{4}{5} =$  

16.  $\frac{1}{4} =$  

17.  $\frac{1}{10} =$  

18.  $\frac{7}{10} =$  


19.  $\frac{3}{8} =$  


20.  $\frac{5}{6} =$  

# Identifying fractions - using blocks

## Grade 3 Fractions Worksheet

Color the fraction.

1.  $\frac{1}{3} =$  


2.  $\frac{1}{2} =$  

3.  $\frac{2}{6} =$  

4.  $\frac{4}{10} =$  


5.  $\frac{2}{5} =$  


6.  $\frac{6}{8} =$  

7.  $\frac{1}{5} =$  

8.  $\frac{3}{6} =$  

9.  $\frac{6}{10} =$  

10.  $\frac{2}{3} =$  


11.  $\frac{2}{4} =$  


12.  $\frac{1}{8} =$  

13.  $\frac{4}{6} =$  

14.  $\frac{2}{10} =$  

15.  $\frac{4}{5} =$  

16.  $\frac{1}{4} =$  

17.  $\frac{1}{10} =$  

18.  $\frac{7}{10} =$  

19.  $\frac{3}{8} =$  

20.  $\frac{5}{6} =$  